


# Theory Quiz

## Keyboard Level 5

### Key Signatures

---

Identify each key signature below. All key signatures are major.



### Order of Accidentals

---

Write the order of sharps on the lines below:

\_\_\_\_\_

Write the order of flats on these lines:

\_\_\_\_\_

## Intervals

---

Identify each interval. Your answer should have two parts—a number giving the distance (ex. Write "3" for a 3rd), and either "M" for Major or "P" for perfect. One example is given for you.



M2



## Rhythms

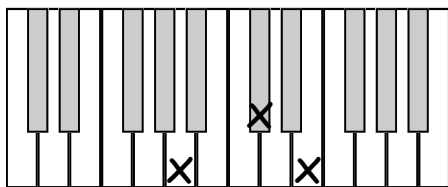
---

Write in counting below each line.

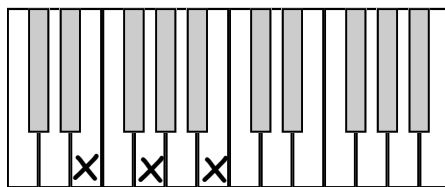


# Triads

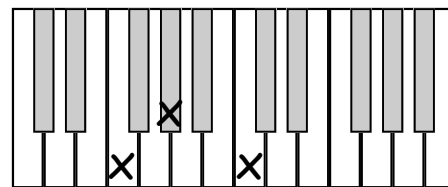
Circle the quality of triad below each picture.



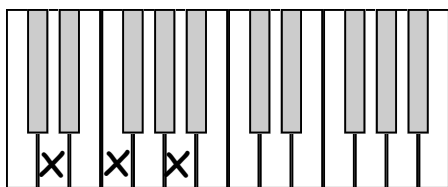
Major      Minor



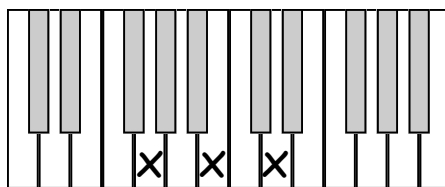
Major      Minor



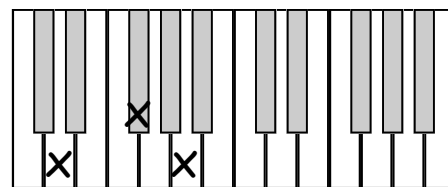
Major      Minor



Major      Minor



Major      Minor



Major      Minor

Draw each triad on the staff, using accidentals if necessary. (Do not add a key signature).




F Major




D minor




B Major



C minor



A Major



E minor

## Scales

---

Add accidentals to the following scales to create the qualities (i.e. major, minor) given. (Do not add a key signature.)

A Major



e natural minor



d harmonic minor

